



Name: _____

Addition


Directions: Add and color the following items below.




$3+3=$ _____




$2+4=$ _____




$2+3=$ _____




$5+1=$ _____




$2+6=$ _____




$1+1=$ _____



$3+5=$ _____



$7+2=$ _____











$1+2=$ _____





Name: _____





Missing numbers

Directions: Fill the missing numbers.

| | | | |
|--|--|--|--|
|  <p>5</p> |  <p>6</p> |  |  <p>8</p> |
|--|--|--|--|

| | | | |
|---|--|--|---|
|  <p>1</p> |  |  <p>3</p> |  <p>4</p> |
|---|--|--|---|


| | | | |
|--|--|---|---|
|  <p>7</p> |  <p>8</p> |  <p>9</p> |  |
|--|--|---|---|

| | | | |
|---|--|---|--|
|  |  <p>4</p> |  <p>5</p> |  <p>6</p> |
|---|--|---|--|


Name: _____

Subtraction

Directions: Use the pictures to complete the equation. Color the objects.



$$4 - 2 = \square$$



$$9 - 4 = \square$$



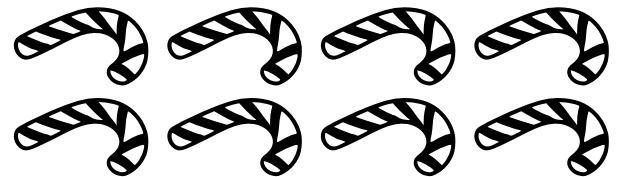
$$8 - 3 = \square$$




$$6 - 3 = \square$$



$$10 - 4 = \square$$



$$8 - 4 = \square$$



$$7 - 3 = \square$$


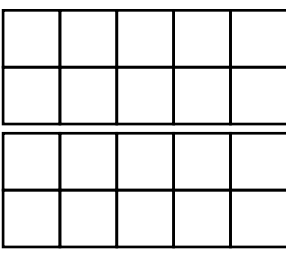

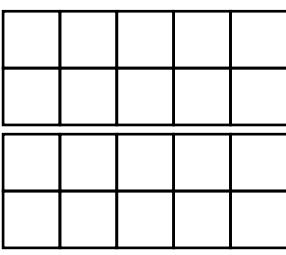

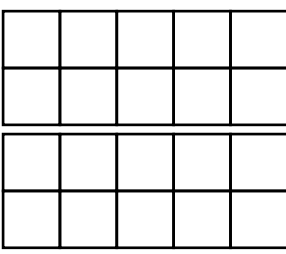

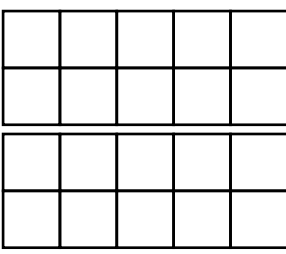

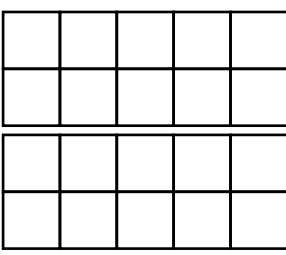


$$5 - 3 = \square$$

Name: _____

How many?

Directions: Count the object, complete the frame and color the number.

| COUNT | COMPLETE THE FRAME | COLOR THE NUMBER |
|---|---|------------------|
|  |  | 12 13 14 |
|  |  | 13 14 15 |
|  |  | 16 17 18 |
|  |  | 18 19 20 |
|  |  | 12 13 14 |

Name: _____

Comparing Numbers

Directions: Use the greater than, less than, and equal to signs to compare.

$14 \square 14$

$40 \square 43$

$23 \square 17$

$29 \square 27$

$38 \square 61$

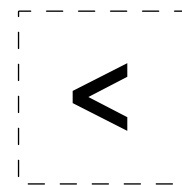
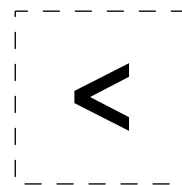
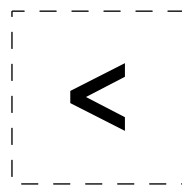
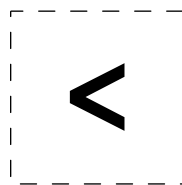
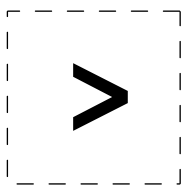
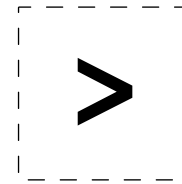
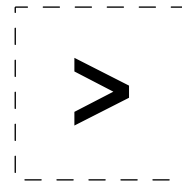
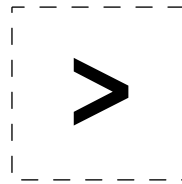
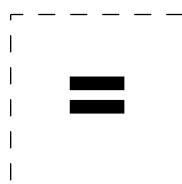
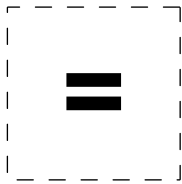
$15 \square 18$

$20 \square 31$

$50 \square 50$

$82 \square 74$

$64 \square 49$



Name: _____

telling time!

Directions: Draw the hands of the clock to show the given time.



7:00



4:00



1:00



6:00



2:00



3:00

Name: _____

Number order

Directions: Put the numbers in order from least to greatest.



69, 23, 10, 13, 28

| | | | | |
|----------------------|----------------------|----------------------|----------------------|----------------------|
| <input type="text"/> | <input type="text"/> | <input type="text"/> | <input type="text"/> | <input type="text"/> |
|----------------------|----------------------|----------------------|----------------------|----------------------|

20, 14, 19, 98, 15

| | | | | |
|----------------------|----------------------|----------------------|----------------------|----------------------|
| <input type="text"/> | <input type="text"/> | <input type="text"/> | <input type="text"/> | <input type="text"/> |
|----------------------|----------------------|----------------------|----------------------|----------------------|

34, 55, 70, 83, 23

| | | | | |
|----------------------|----------------------|----------------------|----------------------|----------------------|
| <input type="text"/> | <input type="text"/> | <input type="text"/> | <input type="text"/> | <input type="text"/> |
|----------------------|----------------------|----------------------|----------------------|----------------------|

90, 99, 88, 36, 58

| | | | | |
|----------------------|----------------------|----------------------|----------------------|----------------------|
| <input type="text"/> | <input type="text"/> | <input type="text"/> | <input type="text"/> | <input type="text"/> |
|----------------------|----------------------|----------------------|----------------------|----------------------|

40, 55, 80, 15, 13

| | | | | |
|----------------------|----------------------|----------------------|----------------------|----------------------|
| <input type="text"/> | <input type="text"/> | <input type="text"/> | <input type="text"/> | <input type="text"/> |
|----------------------|----------------------|----------------------|----------------------|----------------------|

42, 69, 90, 29, 7

| | | | | |
|----------------------|----------------------|----------------------|----------------------|----------------------|
| <input type="text"/> | <input type="text"/> | <input type="text"/> | <input type="text"/> | <input type="text"/> |
|----------------------|----------------------|----------------------|----------------------|----------------------|

99, 75, 11, 64, 53

| | | | | |
|----------------------|----------------------|----------------------|----------------------|----------------------|
| <input type="text"/> | <input type="text"/> | <input type="text"/> | <input type="text"/> | <input type="text"/> |
|----------------------|----------------------|----------------------|----------------------|----------------------|

102, 85, 34, 56, 64

| | | | | |
|----------------------|----------------------|----------------------|----------------------|----------------------|
| <input type="text"/> | <input type="text"/> | <input type="text"/> | <input type="text"/> | <input type="text"/> |
|----------------------|----------------------|----------------------|----------------------|----------------------|

10, 5, 73, 16, 50

| | | | | |
|----------------------|----------------------|----------------------|----------------------|----------------------|
| <input type="text"/> | <input type="text"/> | <input type="text"/> | <input type="text"/> | <input type="text"/> |
|----------------------|----------------------|----------------------|----------------------|----------------------|

78, 67, 50, 40, 13

| | | | | |
|----------------------|----------------------|----------------------|----------------------|----------------------|
| <input type="text"/> | <input type="text"/> | <input type="text"/> | <input type="text"/> | <input type="text"/> |
|----------------------|----------------------|----------------------|----------------------|----------------------|

25, 10, 46, 22, 17

| | | | | |
|----------------------|----------------------|----------------------|----------------------|----------------------|
| <input type="text"/> | <input type="text"/> | <input type="text"/> | <input type="text"/> | <input type="text"/> |
|----------------------|----------------------|----------------------|----------------------|----------------------|

60, 34, 52, 17, 29

| | | | | |
|----------------------|----------------------|----------------------|----------------------|----------------------|
| <input type="text"/> | <input type="text"/> | <input type="text"/> | <input type="text"/> | <input type="text"/> |
|----------------------|----------------------|----------------------|----------------------|----------------------|

Name: _____

Before and after

Directions: Write the number that comes before and after.

| | | |
|--|----|--|
| | 32 | |
|--|----|--|

| | | |
|--|----|--|
| | 25 | |
|--|----|--|

| | | |
|--|----|--|
| | 82 | |
|--|----|--|

| | | |
|--|----|--|
| | 32 | |
|--|----|--|

| | | |
|--|----|--|
| | 40 | |
|--|----|--|

| | | |
|--|----|--|
| | 15 | |
|--|----|--|

| | | |
|--|----|--|
| | 52 | |
|--|----|--|

| | | |
|--|----|--|
| | 27 | |
|--|----|--|

| | | |
|--|----|--|
| | 12 | |
|--|----|--|

| | | |
|--|----|--|
| | 24 | |
|--|----|--|

| | | |
|--|----|--|
| | 30 | |
|--|----|--|

| | | |
|--|----|--|
| | 65 | |
|--|----|--|

| | | |
|--|----|--|
| | 65 | |
|--|----|--|

| | | |
|--|----|--|
| | 10 | |
|--|----|--|

| | | |
|--|----|--|
| | 92 | |
|--|----|--|

| | | |
|--|----|--|
| | 47 | |
|--|----|--|

Name: _____

Time by the hour

Directions: Write the time shown in each clock.

1. _____



6. _____



2. _____



7. _____



3. _____



8. _____



4. _____



9. _____



5. _____



10. _____

